


Eduard Dăncilă
Ioan Dăncilă

Matematică și explorarea mediului

clasa pregătitoare

semestrul al II-lea






Ce face fetița
în fiecare
imagine?



Desenează.



Colorează.



Unește.



Scrive numărul.




Scrive cuvântul.



Taie.



Numără.



Încercuiește.

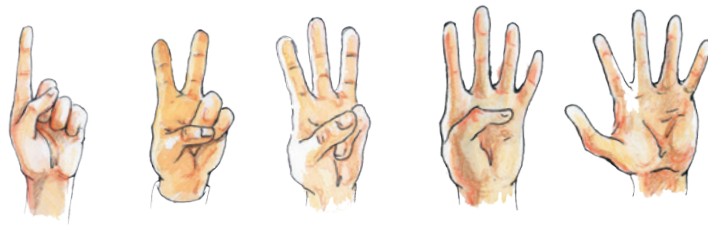


Numește.





Se gândește.

Numerele de la 1 la 5



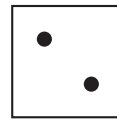

• Numărul mai mare.



4

5

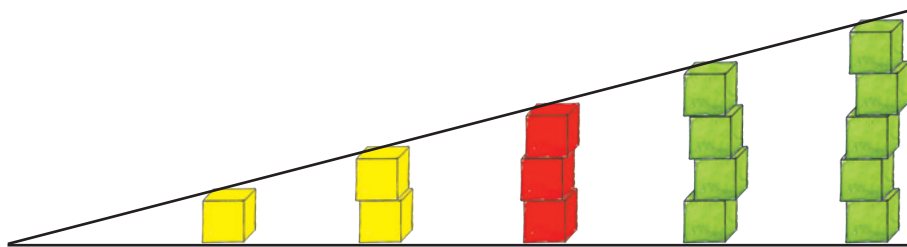
• Numărul mai mic.



3

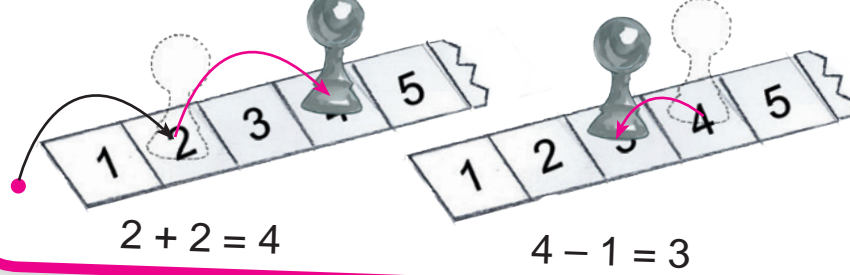
1

• Pune-le în ordine.



Numerele **mai mari** decât 3 sunt

Numerele **mai mici** decât 3 sunt



$$2 + 2 = 4$$

$$4 - 1 = 3$$


• Scrie cu numere și semne matematice ceea ce rezultă.



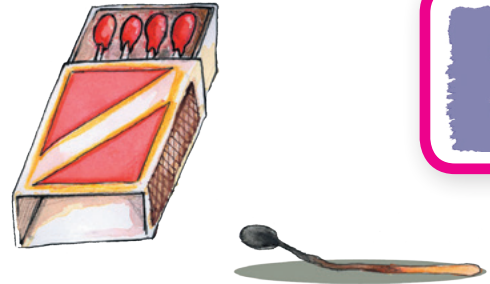
$$\square \circ \square = \square$$




$$\square \circ \square = \square$$



$$\square \circ \square = \square$$



$$\square \circ \square = \square$$

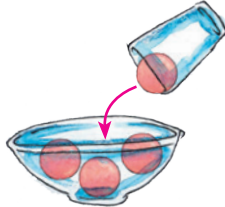


$$\square \circ \square = \square$$

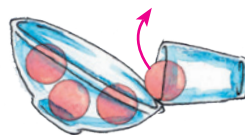


$$\square \circ \square = \square$$


Adunarea și scăderea (II)




$$3 + 1$$



$$4 - 1$$




$$\square \bigcirc \square = \square$$



$$\square \bigcirc \square = \square$$



$$\square \bigcirc \square = \square$$



$$\square \bigcirc \square = \square$$



$$\square \bigcirc \square = \square$$



$$\square \bigcirc \square = \square$$



● Sunt în ordine desenele?



Scufița-Roșie



1



2



3



4



5

